

INTERNATIONAL TALENT SEARCH EXAMINATION 2024 - 2025

CLASS – III SUBJECT – SCIENCE

1. House of a bird is known as:

- A) Nest
- B) Den
- C) Water aquarium
- D) Kennel
- E) None of these

2. A bird which does not build its own nest.

- A) Nightingale
- B) Pigeon
- C) Cuckoo
- D) Kite
- E) None of these

3. Owl does not eat:

- A) Rabbits
- B) Mice
- C) Rats
- D) Grass
- E) None of these

4. Name the feathers used by the birds to change their direction.

- A) Down feathers
- B) Tail feathers
- C) Flight feathers
- D) All the above
- E) None of these

5. I am a carnivorous bird. I fly very high in the sky. Who am I?

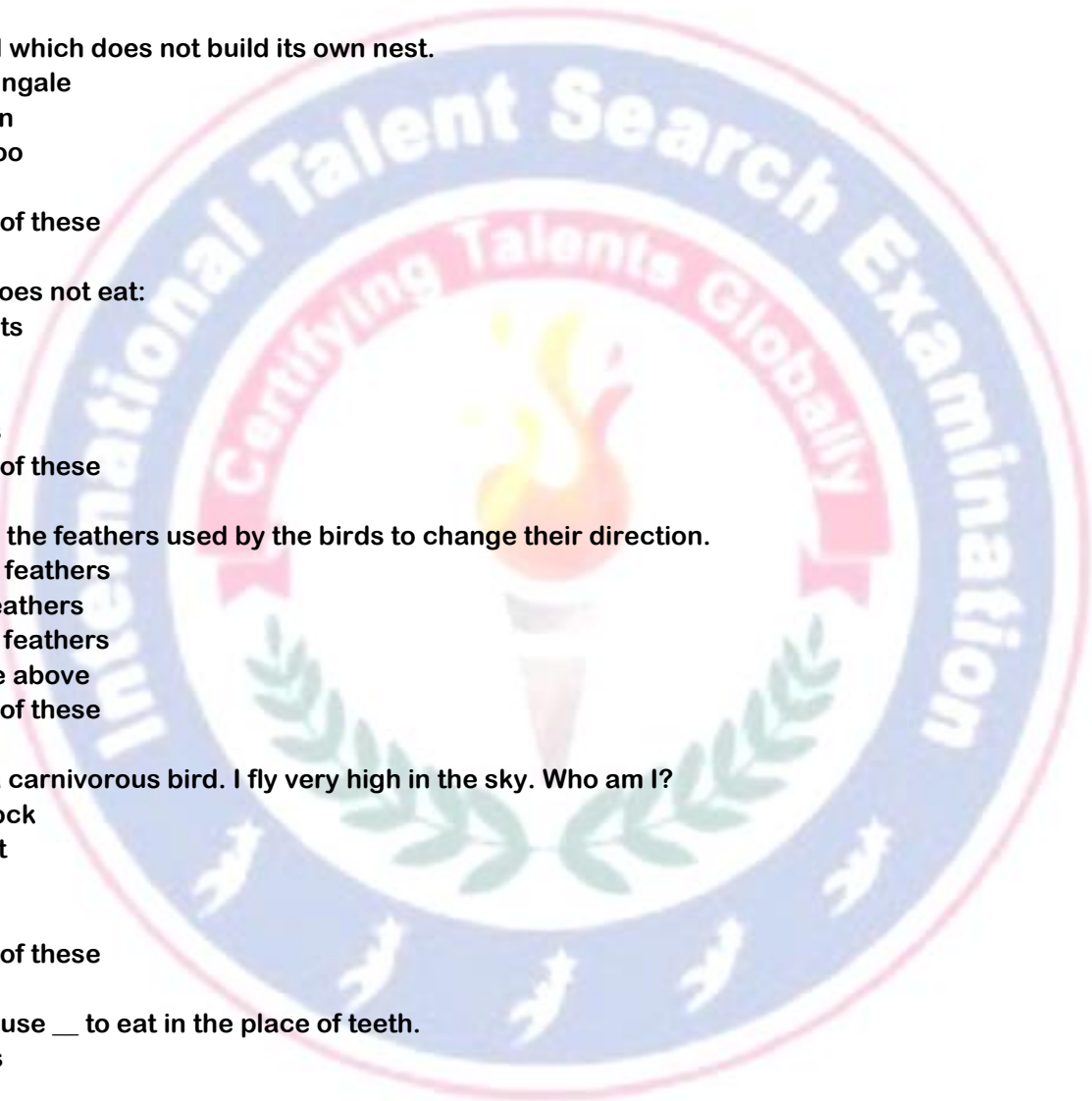
- A) Peacock
- B) Parrot
- C) Kiwi
- D) Kite
- E) None of these

6. Birds use __ to eat in the place of teeth.

- A) Claws
- B) Tail
- C) Beak
- D) Feathers
- E) None of these

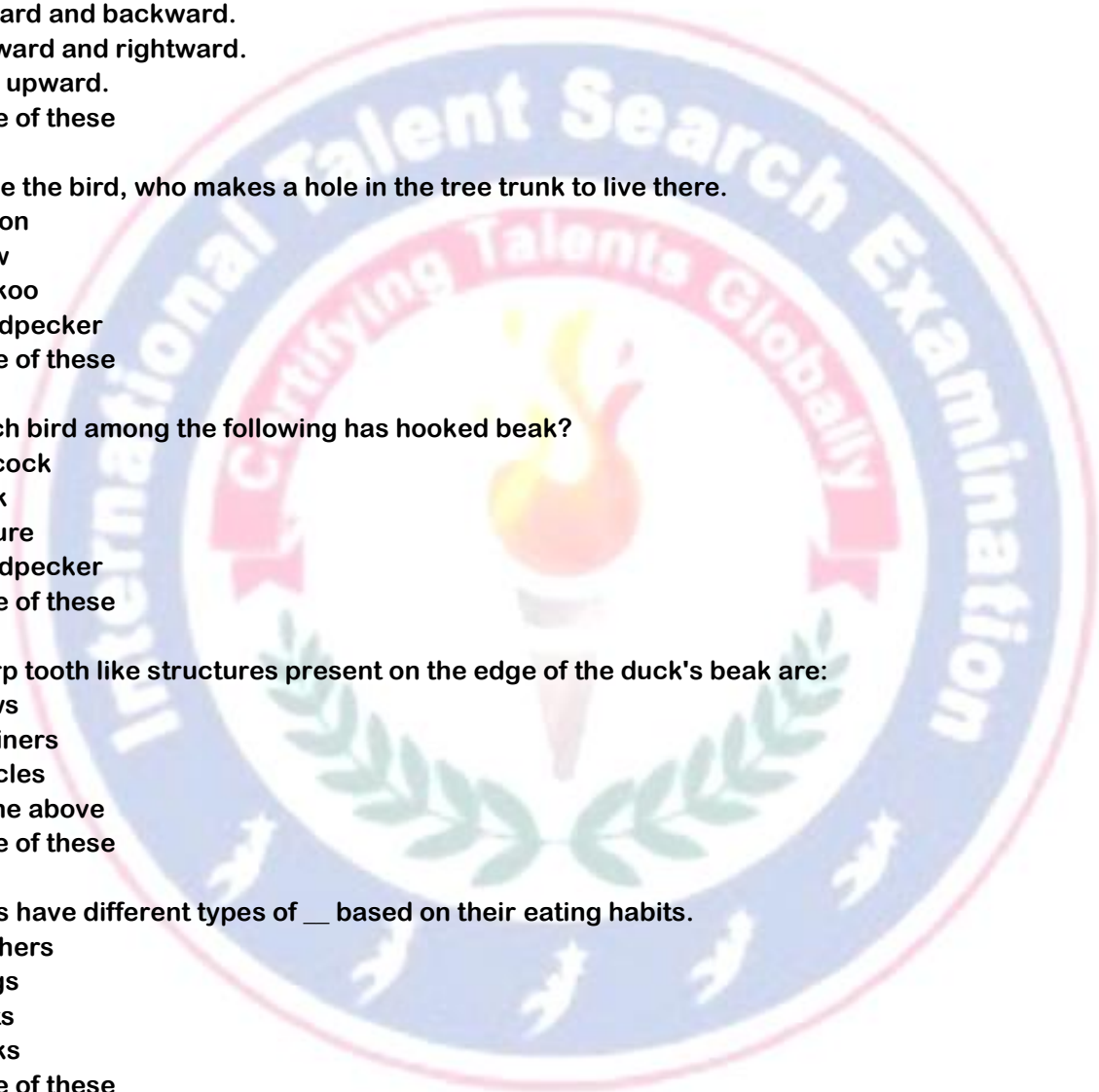
7. Which among the following does not have horny beak?

- A) Sparrow
- B) Pigeon
- C) Eagle
- D) Peacock
- E) None of these



INTERNATIONAL TALENT SEARCH EXAMINATION 2024 - 2025

8. Which one of the following statements is not correct?
- A) Birds migrate from one place to another in search of food.
 - B) Some birds cannot fly.
 - C) Birds reproduce by laying eggs.
 - D) All birds reproduce by giving birth to young ones.
 - E) None of these
9. The direction of wings in the upstroke movement of birds is:
- A) Downward and forward.
 - B) Upward and backward.
 - C) Leftward and rightward.
 - D) Only upward.
 - E) None of these
10. Name the bird, who makes a hole in the tree trunk to live there.
- A) Pigeon
 - B) Crow
 - C) Cuckoo
 - D) Woodpecker
 - E) None of these
11. Which bird among the following has hooked beak?
- A) Peacock
 - B) Duck
 - C) Vulture
 - D) Woodpecker
 - E) None of these
12. Sharp tooth like structures present on the edge of the duck's beak are:
- A) Claws
 - B) Strainers
 - C) Muscles
 - D) All the above
 - E) None of these
13. Birds have different types of ___ based on their eating habits.
- A) Feathers
 - B) Wings
 - C) Nests
 - D) Beaks
 - E) None of these
14. Body weight of a bird is light due to its:
- A) Hollow bones
 - B) Small beaks
 - C) Feathers
 - D) All the above
 - E) None of these
15. This animal has specially designed boat shaped body.
- A) Parrot



INTERNATIONAL TALENT SEARCH EXAMINATION 2024 - 2025

- B) Dog
- C) Elephant
- D) Cat
- E) None of these

16. The largest bird is:

- A) Owl
- B) Eagle
- C) Ostrich
- D) Parrot
- E) None of these

17. ___ are the only sources of oxygen.

- A) Animals
- B) Plants
- C) Birds
- D) Rivers
- E) None of these

18. I am an organism and I prepare my own food. Who am I?

- A) Autotroph
- B) Saprophyte
- C) Heterotroph
- D) Secondary consumer
- E) one of these

19. Plants do not require ___ to prepare their food.

- A) Carbon dioxide
- B) Oxygen
- C) Sunlight
- D) Water
- E) None of these

20. Plants clean the environment by removing harmful ___ from it.

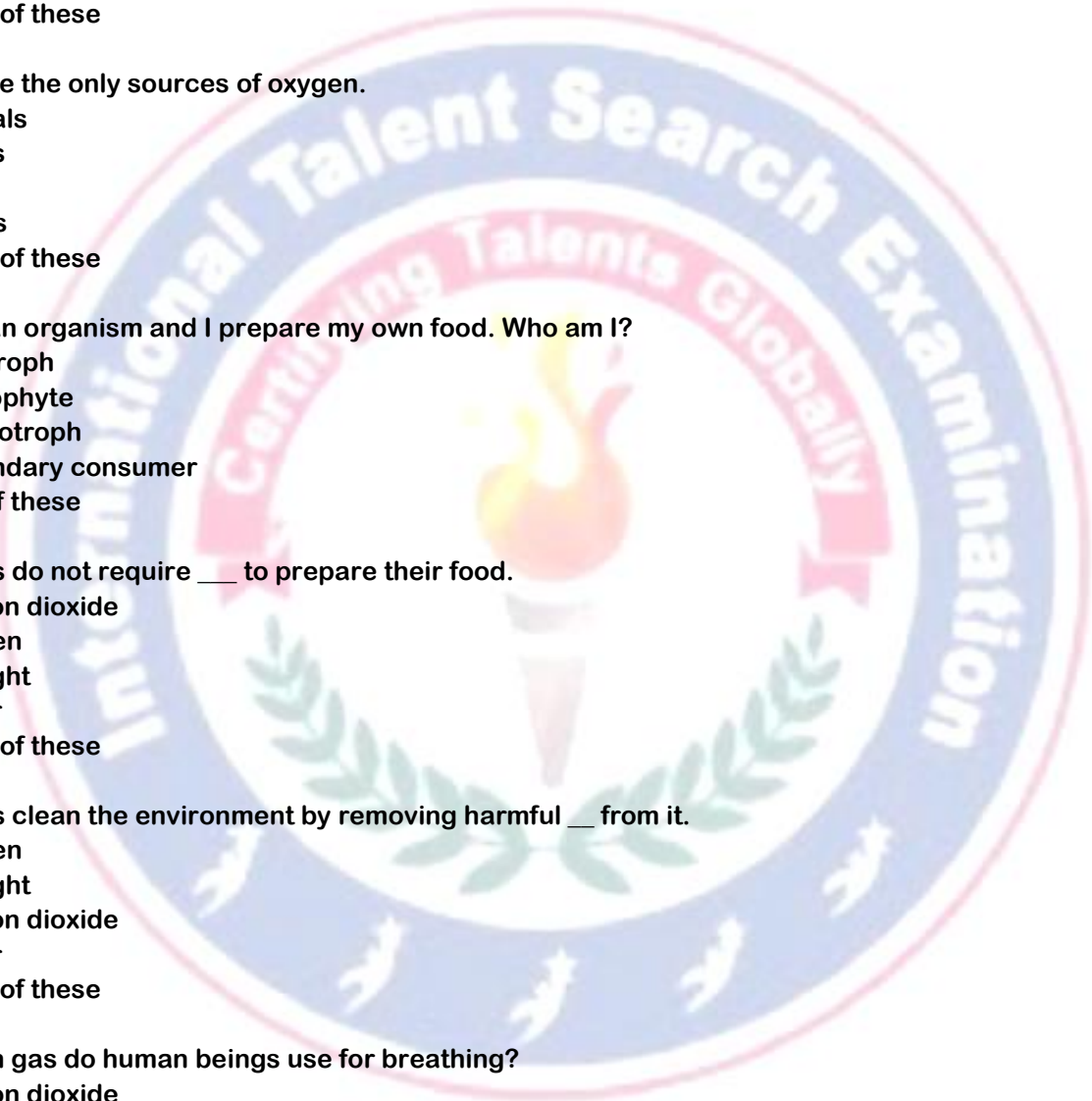
- A) Oxygen
- B) Sunlight
- C) Carbon dioxide
- D) Water
- E) None of these

21. Which gas do human beings use for breathing?

- A) Carbon dioxide
- B) Carbon monoxide
- C) Nitrogen
- D) Oxygen
- E) None of these

22. Process by which plants prepare their food is known as:

- A) Photosynthesis
- B) Phototropism
- C) Photon
- D) Locomotion



INTERNATIONAL TALENT SEARCH EXAMINATION 2024 - 2025

E) None of these

23. Match the following:

Column A	Column B
(i) Leaf	[A] Keeps the leaves in light
(ii) Stem	[B] Absorbs water from the soil
(iii) Root	[C] Contains the seeds
(iv) Fruit	[D] Prepares food for the plant

A) (i - D), (ii - C), (iii - B), (iv - A)

B) (i - D), (ii - A), (iii - B), (iv - C)

C) (i - B), (ii - A), (iii - D), (iv - C)

D) (i - C), (ii - A), (iii - D), (iv - B)

E) None of these

24. This pigment is present in plants and plays an important role in the process of photosynthesis:

A) Chlorine

B) Chlorophyll

C) Chloroform

D) Fruits

E) None of these

25. Which statement among the following is not correct?

A) Plants use sunlight for photosynthesis.

B) Plants provide us wood for furniture.

C) Plants do not use water for photosynthesis.

D) Plants maintain balance in nature.

E) None of these

26. Which plant among the following is a terrestrial plant?

A) Vallisneria

B) Water lily

C) Hydrilla

D) Neem

E) None of these

27. Shoot system of a plant does not include:

A) Branches

B) Roots

C) Leaves

D) Flowers

E) None of these

28. Which among the following is not a function of roots?

A) They hold the plant firmly.

B) They provide nutrition to the plant from soil.

C) They provide sunlight to the plant.

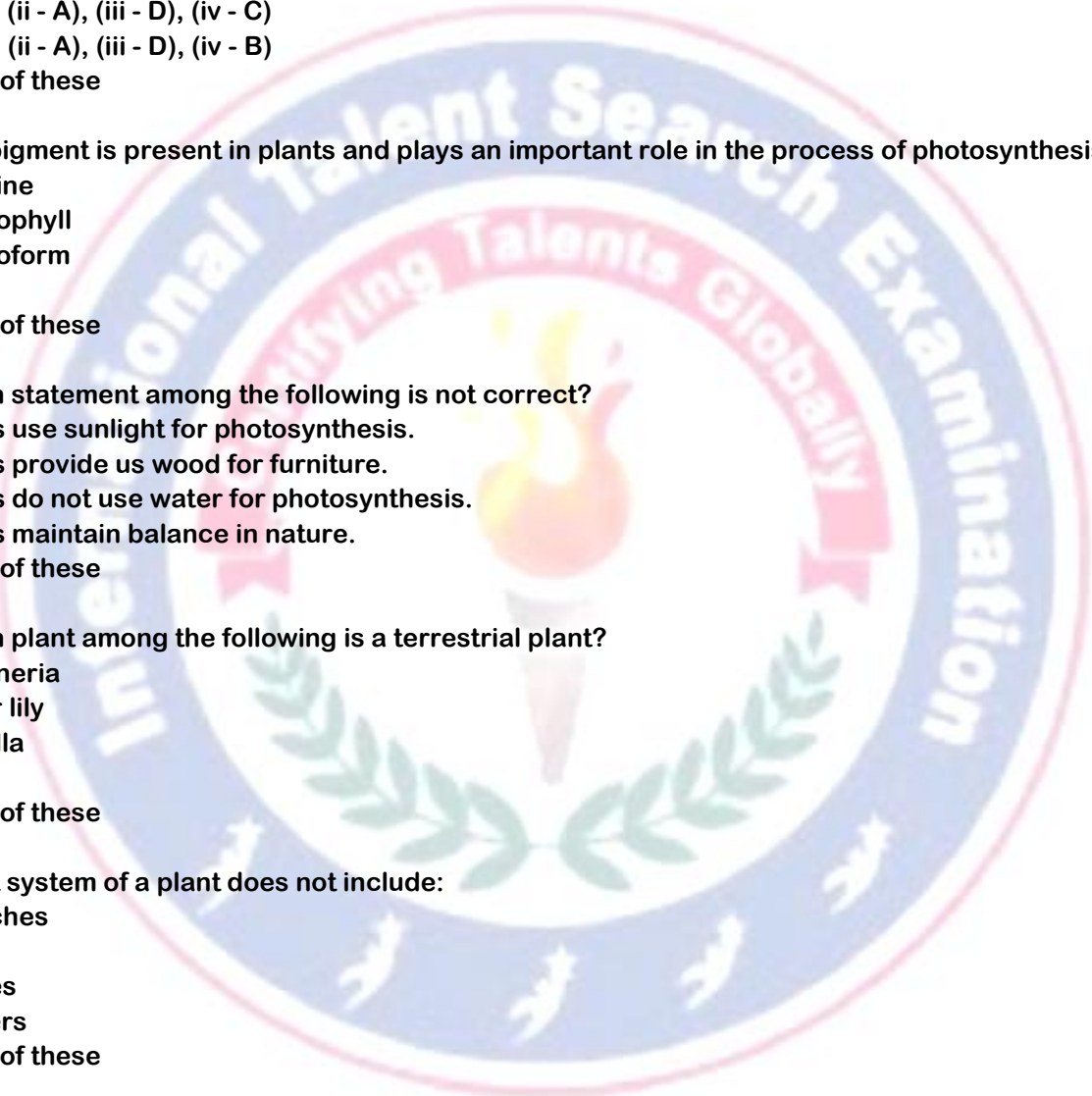
D) They help in absorption of water.

E) None of these

29. I am a beautiful flower and have thorns. Who am I?

A) Cauliflower

B) Rose



INTERNATIONAL TALENT SEARCH EXAMINATION 2024 - 2025

- C) Cactus
- D) Tulsi
- E) None of these

30. Plants growing on land are:

- A) Aquatic plants
- B) Terrestrial plants
- C) Fixed plants
- D) Floating plants
- E) None of these

31. Phototropism is a movement of plants towards:

- A) Sunlight
- B) Ground
- C) Water
- D) Other plants
- E) None of these

32. This is known as kitchen of a plant.

- A) Stem
- B) Leaf
- C) Root
- D) Flower
- E) None of these

33. Which one of the following plant responds to touch?

- A) Mimosa
- B) Marigold
- C) Sunflower
- D) Lily
- E) None of these

34. Which plant among the following is not an aquatic plant?

- A) Water hyacinth
- B) Hydrilla
- C) Lotus
- D) Vallisneria
- E) None of these

35. This plant grows in water and have long slender hollow stem.

- A) Lily
- B) Lotus
- C) Rose
- D) Water hyacinth
- E) None of these

36. I am a plant but I eat insects. Guess my name?

- A) Mimosa
- B) Pitcher plant
- C) Coconut
- D) Vallisneria
- E) None of these



INTERNATIONAL TALENT SEARCH EXAMINATION 2024 - 2025

37. Which one of the following is a fixed aquatic plant?

- A) Lotus
- B) Duckweed
- C) Water hyacinth
- D) Hydrilla
- E) None of these

38. ___ plant grows in hot and damp area.

- A) Cactus
- B) Peepal
- C) Coconut
- D) Banyan
- E) None of these

39. Which plant is used for medicinal purpose?

- A) Tulsi
- B) Neem
- C) Turmeric
- D) All the above
- E) None of these

40. This plant has thorns on it and does not require much water to grow.

- A) Coconut
- B) Cactus
- C) Peepal
- D) Neem
- E) None of these

41. In most of the desert plants, leaves are modified to ___.

- A) Roots
- B) Stem
- C) Flowers
- D) Spines
- E) None of these

42. Plants need ___ or they might wilt.

- A) Oxygen
- B) Water
- C) Grass
- D) Animals
- E) None of these

43. We do not get fruits from this tree?

- A) Apple tree
- B) Mango tree
- C) Fern tree
- D) Papaya tree
- E) None of these

44. Process by which a seed grows into a tiny plant is called:

- A) Reproduction



INTERNATIONAL TALENT SEARCH EXAMINATION 2024 - 2025

- B) Seedling
- C) Germination
- D) Photosynthesis
- E) None of these

45. Plants which have soft and thin stems are:

- A) Trees
- B) Shrubs
- C) Herbs
- D) Aquatic plants
- E) None of these

