

INTERNATIONAL TALENT SEARCH EXAMINATION 2024 - 2025

CLASS - I SUBJECT - MATHEMATICS

1. What comes just after 6 while doing forth counting from 5 to 10?
A) 5
B) 6
C) 7
D) All the above
E) None of these
2. In a counting, if 10 is just before 9, which kind of counting is this?
A) Back counting
B) Forth counting
C) Both A and B
D) All the above
E) None of these
3. Find the numbers, which come just before and just after 11 in back counting?
A) 9 & 10
B) 12 & 10
C) 13 & 14
D) All the above
E) None of these
4. Find the number of which 21 just comes before. If we do forth counting from 20 to 25.
A) 20
B) 19
C) 22
D) All the above
E) None of these
5. X is 1 greater than 18 and while counting, it comes just before 18. Name the counting.
A) Back counting
B) Fourth counting
C) Simple counting
D) All the above
E) None of these

6. $\triangle = 10$, $\blacktriangle = 15$, $\square = 12$, $\otimes = 11$, $\blacksquare = 14$, $\circ = 13$.

Look at the above figure and arrange the symbols in back counting order.

- A) $\triangle \otimes \square \circ \blacksquare \blacktriangle$
- B) $\blacktriangle \blacksquare \circ \otimes \square \triangle$
- C) $\blacktriangle \blacksquare \otimes \circ \square \triangle$

INTERNATIONAL TALENT SEARCH EXAMINATION 2024 - 2025



D)

E) None of these

7. Which one of the following is true?

- A) Five ten =40
- B) Two twenty =30
- C) Three ten =30
- D) All the above
- E) None of these

8. Which one of the following is the counting in twenty?

- A) 20, 40, 60, 80, 100
- B) 10, 20, 30, 40, 50
- C) 20, 30, 40, 50, 60
- D) All the above
- E) None of these

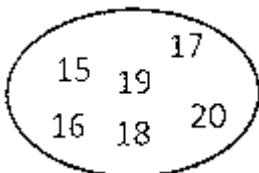
9. Which one of the following comes between 17 and 19 in reverse counting?

- A) 21
- B) 20
- C) 18
- D) All the above
- E) None of these

10. If the numbers 11, 12, 13 & 14 are counted in words then what will come third in forth counting?

- A) Fourteen
- B) Eleven
- C) Thirteen
- D) All the above
- E) None of these

11. Arrange the numbers given in the circle in forth counting order and find what number comes just before 16?



- A) 15
- B) 17
- C) 18
- D) 19
- E) None of these

12. Find the numbers which come just before and just after 18 in forth counting from 14 to 21.

- A) 17 and 16
- B) 19 and 15

INTERNATIONAL TALENT SEARCH EXAMINATION 2024 - 2025

- C) 17 and 19
- D) 19 and 21
- E) None of these



13. Look at the following figure

Find the value of x and choose the number which comes just before and after x ?

- A) $x = 26$; 25 and 27
- B) $x = 27$; 29 and 27
- C) $x = 26$; 22 and 23
- D) $x = 27$; 26 and 24
- E) None of these

14. Which one of the following is counting in tens?

- A) 10, 20, 40, 80
- B) 10, 30, 50, 70
- C) 10, 20, 30, 40
- D) All the above
- E) None of these

15. Choose the correct option from the following.

- A) Nine tens = 40
- B) Eight tens = 60
- C) Five tens = 50
- D) Four tens = 50
- E) None of these

16. In a counting. If 19 comes just before 18, what will come just after 16?

- A) 17
- B) 18
- C) 15
- D) 14
- E) None of these

17. Which one of the following is correct for hundred?

- A) 10 tens
- B) 5 twenties
- C) Both A and B
- D) All the above
- E) None of these

18. In a counting 13 is just before 14. Which one of the following kind of counting is this?

- A) Back counting
- B) Forth counting
- C) Reverse counting
- D) All the above
- E) None of these

19. A is just before 15 in back counting from 20 to 12. Which one of the following is equal to A?

- A) 14
- B) 15

INTERNATIONAL TALENT SEARCH EXAMINATION 2024 - 2025

- C) 16
- D) All the above
- E) None of these

20. Y is just after 21 in a forth counting from 15 to 22. Find the value of Y.

- A) 20
- B) 21
- C) 22
- D) All the above
- E) None of these

21. Which one of the following is a member of counting in tens?

- A) 20
- B) 21
- C) 22
- D) All the above
- E) None of these

22. In which one of the following counting, we count from smallest to largest?

- A) Back counting
- B) Forth counting
- C) Reverse counting
- D) All the above
- E) None of these

23. If A is one less than 30, where will it come if we do back counting from 35 to 28?

- A) Just before 30
- B) Just after 30
- C) Just after 28
- D) All the above
- E) None of these

24. Fill in the blank: In back counting from 25 to 17, 18 comes _ 17.

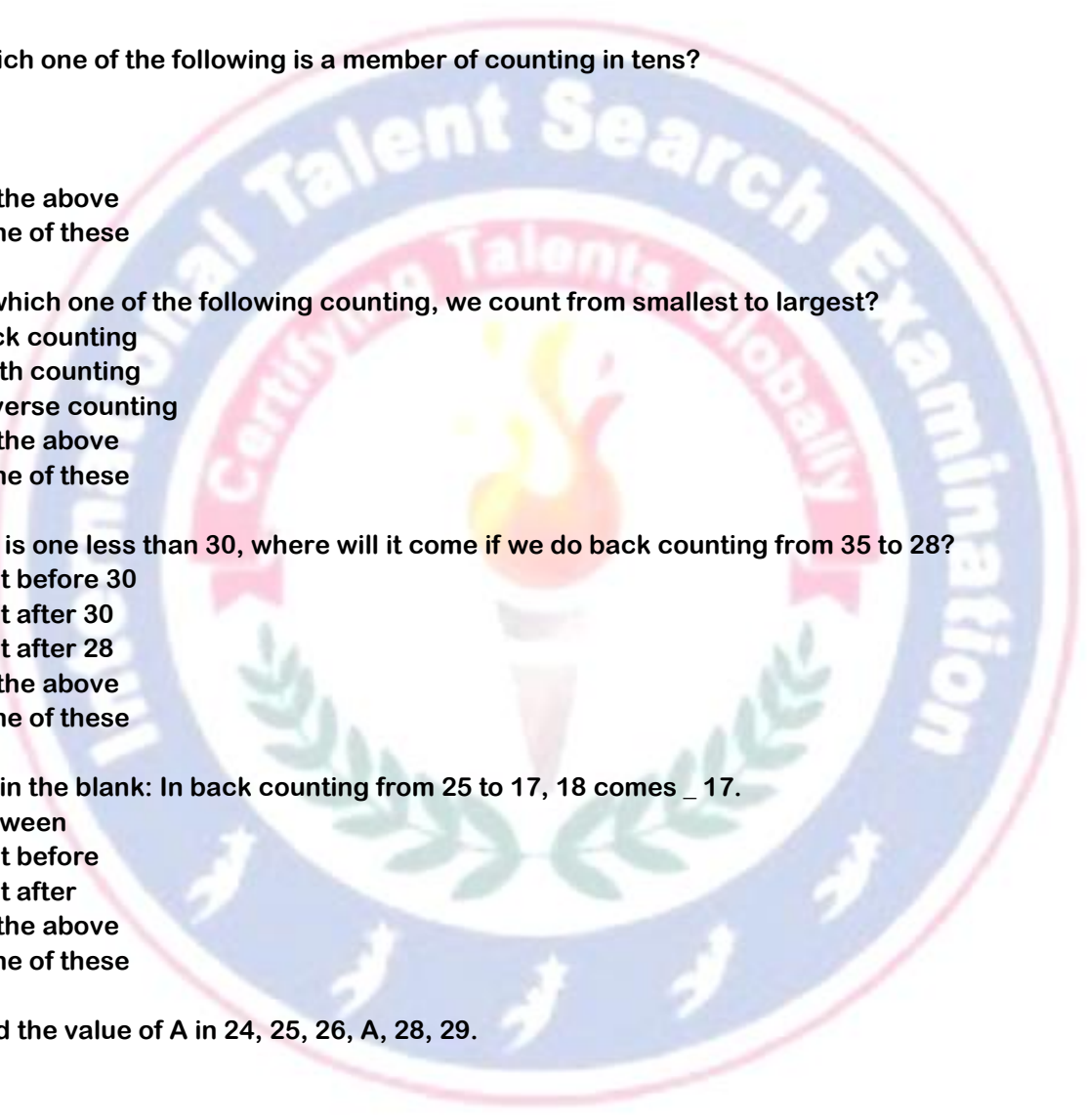
- A) Between
- B) Just before
- C) Just after
- D) All the above
- E) None of these

25. Find the value of A in 24, 25, 26, A, 28, 29.

- A) 24
- B) 27
- C) 30
- D) 26
- E) None of these

26. Counting down from seventeen, what comes next?

- A) Twenty
- B) Eighteen
- C) Sixteen
- D) Ten
- E) None of these



INTERNATIONAL TALENT SEARCH EXAMINATION 2024 - 2025

27. Which of the following numbers are more than 15 but less than 20?

- A) 14, 15, 16, 17
- B) 16, 17, 18, 19
- C) 11, 12, 13, 14
- D) 15, 16, 17, 18
- E) None of these

28. What will come after 12 in back counting?

- A) 12
- B) 13
- C) 14
- D) 11
- E) None of these

29. What is the number which comes after one more than 3 in back counting?

- A) 3
- B) 4
- C) 5
- D) 2
- E) None of these

30. What is the number which comes after 5 and before 7 in forth counting?

- A) 5
- B) 6
- C) 7
- D) 8
- E) None of these



31. Kimi has three pet fish.

Fish A is younger than Angel but is older than Jaws. Fish B is not Jaws. One fish is named Bubbles. What is the name of fish pictured at C?

- A) Bubbles
- B) Angles
- C) Jaws
- D) None

32. There are three kittens. How many ears are there?

- A) 8
- B) 4
- C) 6
- D) 5

33. There are three kids. They are aged 5, 6 and 7. The six year old kid hasn't got blue and green balloon. The five year old -kid hasn't got yellow and blue balloon. Who has got yellow balloon?

- A) Six year old kid
- B) Five year old kid
- C) Seven year old kid
- D) None

INTERNATIONAL TALENT SEARCH EXAMINATION 2024 - 2025

34. There are three geese, A, B and C. B is older than C and younger than A. Who is the youngest?

- A) A
- B) B
- C) C
- D) None

35. There are three geese, A, B and C. B is older than C and younger than A. Who is the oldest?

- A) A
- B) B
- C) C
- D) None

36. Raj, Amit and Dev are sitting in a row. Raj is sitting between Amit and Dev. Which of the following is the correct order?

- A)

Raj	Amit	Dev
-----	------	-----
- B)

Dev	Amit	Raj
-----	------	-----
- C)

Amit	Raj	Dev
------	-----	-----
- D)

Raj	Dev	Amit
-----	-----	------

37. Four friends are celebrating their birthdays. The candles on the cake show their ages. Who is the oldest among them.

- A) 
Ankit
- B) 
Ruchi
- C) 
Parul
- D) 
Anu

38. Given two baskets show the number of apples. Which of the following statements is correct?

INTERNATIONAL TALENT SEARCH EXAMINATION 2024 - 2025

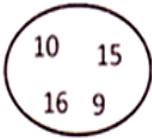


- A) Basket X has more apples than Basket Y.
B) Basket X has one apple less than basket Y.
C) Basket Y has more apples than Basket X.
D) Both Baskets X and Y have equal apples.
39. Study the following information carefully and answer the questions given below. Bunty, Dev and Manav are sitting around a circle facing the centre. Dev is sitting between Bunty and Manav. Manav is sitting first right to Bunty. Who is sitting to the left of Dev?
A) Bunty
B) Manav
C) Both
D) None
40. Study the following information carefully and answer the questions given below. Bunty, Dev and Manav are sitting around a circle facing the centre. Dev is sitting between Bunty and Manav. Manav is sitting first right to Bunty. Who is sitting to the left of Bunty?
A) Dev
B) Manav
C) Both
D) None
41. Temperature of different days of a week has been given in the following table:
- | Day | Temperature |
|-----------|-------------|
| Monday | 12°C |
| Tuesday | 15°C |
| Wednesday | 12°C |
| Thursday | 13°C |
| Friday | 10°C |
| Saturday | 14°C |
| Sunday | 16°C |
- Which one of the following days was the coldest day of the week?
A) Monday
B) Wednesday
C) Saturday
D) Friday
E) None of these
42. There are 54 students in class first of a school. If the number of boys in the class is 30. Find the number of girls in the class.
A) 24
B) 14
C) 28
D) 34
E) None of these
43. $14 > 10$ will be read as ____.
A) 10 is greater than 14
B) 14 is less than 10

INTERNATIONAL TALENT SEARCH EXAMINATION 2024 - 2025

- C) 10 is bigger than 14
- D) 14 is greater than 10
- E) None of these

44. What is the smallest number in the following circle?



- A) 15
- B) 16
- C) 9
- D) 10
- E) None of these

45. Choose the incorrect statement.

- A) 05 and 5 are equal.
- B) 60 and 06 are equal.
- C) 07 and 007 are equal.
- D) 08 and 8 are equal.
- E) None of these

