

# INTERNATIONAL TALENT SEARCH EXAMINATION 2024 - 2025

## CLASS - I SUBJECT - MATHEMATICS

1. Amit is taller than Bunny and Bunny is taller than Chetan. Who is tallest among them?

- A) Chetan
- B) Bunny
- C) Amit
- D) None of these

2. Sonia needs some eggs to make a cake. Eggs are not more than five and not less than five. How many eggs she needs to buy?


A)



B)



C)



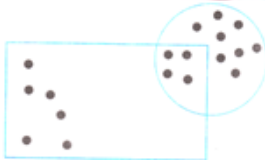
D)



3. Anu has 5 biscuits, Charu has some biscuits. Together they have 7 biscuits. How many biscuits does Charu have?

- A) 2
- B) 4
- C) 6
- D) 3

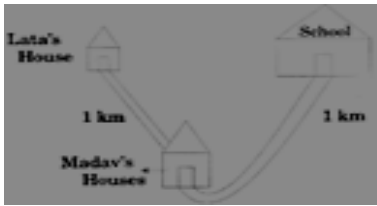
4. In the given figure, how many dots are there in the circle but not in the rectangle?



- A) 8
- B) 12
- C) 6
- D) 7

5. Lata went from her house to Madhav's house, then they went to school. How much distance is travelled by Lata?

# INTERNATIONAL TALENT SEARCH EXAMINATION 2024 - 2025

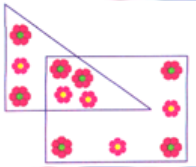


- A) 2 km
- B) 3 km
- C) 1 km
- D) 15 km

6. There are 10 people in the rope skipping race, 5 fell down. How many people did not fall?

- A) 2
- B) 5
- C) 1
- D) 3

7. In the given figure, how many flowers are there in the triangle as well as in the square?



- A) 5
- B) 4
- C) 3
- D) 6

8. Three friends Rahul, Nikhil and Virat went to the zoo. Virat saw an elephant after both Rahul and Nikhil. Rahul saw the elephant second. Who saw the elephant first?

- A) Rahul
- B) Virat
- C) Nikhil
- D) Cannot be determined

9. Three friends Rahul, Nikhil and Virat went to the zoo. Virat saw an elephant after both Rahul and Nikhil. Rahul saw the elephant second. Who saw the elephant last?

- A) Virat
- B) Rahul
- C) Nikhil
- D) Cannot be determined

10. Sheena has 16 friends. She took 7 of them to the movie. How many friends couldn't go to the movies?

- A) 9
- B) 6
- C) 8
- D) 10

11. Meeta ate 3 Pastries, Johnny ate 5 Pastries, and Grandma ate 7 Pastries. How many Pastries did Johnny and Grandma eat altogether?

- A) 7
- B) 12

# INTERNATIONAL TALENT SEARCH EXAMINATION 2024 - 2025

- C) 14
- D) 20

12. Shalu, Kesha, Rehana and Part each likes different colours. Rehana likes pink colour. Shalu does not like yellow colour. Pari likes orange colour and Kesha does not like red colour. Who likes red colour?

- A) Pari
- B) Shalu
- C) Rehana
- D) Kesha

13. Shalu, Kesha, Rehana and Part each likes different colours. Rehana likes pink colour. Shalu does not like yellow colour. Pari likes orange colour and Kesha does not like red colour. Who likes yellow colour?

- A) Kesha
- B) Pari
- C) Rehana
- D) Shalu

14. Tripti ate 4 apple pies and 6 blueberry pies. Grandpa ate only an apple pies. How many pies did Tripti ate \_\_\_ ?

- A) 5
- B) 7
- C) 4
- D) 10

15. Neenahad 8 flowers in her garden. Two of them plucked. Now she has \_\_\_ flowers.

- A) 6
- B) 5
- C) 2
- D) 1

16. Observe the figure carefully to answer the questions.  
there in the heart but not in the rectangle/circle?



How many stars are

- A) 14
- B) 10
- C) 5
- D) 4

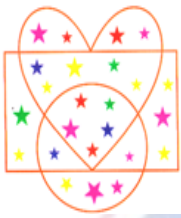
# INTERNATIONAL TALENT SEARCH EXAMINATION 2024 - 2025



17. How many stars are there in rectangle as well as in circle but not in heart?

- A) 5
- B) 10
- C) 7
- D) 15

18. Observe the figure carefully to answer the questions.



How many stars are there in the given figure?

- A) 20
- B) 22
- C) 24
- D) 26

19. Whack-a-worm is a gaming machine and Shreya is playing on it. There are 48 worms in total. Shreya whacked 26 worms. How many worms did she missed \_\_\_?

- A) 28
- B) 22
- C) 30
- D) 10

20. Shreya cooked 50 burgers. She ate 20 burgers. How many burgers did she Mt?

- A) 50 - 30
- B) 50 - 20
- C) 50-30
- D) 50 + 20

21. Jayesh sold 16 hot dogs with Mustard. He sold 14 hot dogs with relish. How many hot dogs here sold by Jayesh altogether?

- A) 10
- B) 12
- C) 30
- D) 35

22. Study the information carefully to answer the questions.

Pinki, Ridhima, Raghav and Mohit are sitting around a dining table facing the centre. Pinki is sitting just right to the Ridhima. Ridhima is sitting just right to the Mohit. Raghav is sitting between Pinki and Mohit. Who is sitting just left of Raghav?

- A) Mohit
- B) Pinki
- C) Ridhima
- D) Cannot be determined



# INTERNATIONAL TALENT SEARCH EXAMINATION 2024 - 2025

23. Study the information carefully to answer the questions.

Pinki, Ridhima, Raghav and Mohit are sitting around a dining table facing the centre. Pinki is sitting just right to the Ridhima. Ridhima is sitting just right to the Mohit. Raghav is sitting between Pinki and Mohit. Who is sitting just right of Mohit?

- A) Raghav
- B) Ridhima
- C) Pinki
- D) Cannot be determined

24. There were 35 brinjals in the contest. The judges picked 4 brinjals to be finalists. How many brinjals were not finalists?

- A) 30
- B) 31
- C) 20
- D) 32

25. Monster Deriff made Tony scream 28 times. Siya screamed 18 times. How many times did they scream altogether?

- A) 26
- B) 46
- C) 56
- D) 36

26. Ram has five fruits with him: Banana, Apple, Guava, Mango, Pineapple. He wants to eat a fruit which: Has "e" in its name Its name is a 5 letter word Which fruit should he eat?

- A) Apple
- B) Banana
- C) Guava
- D) Mango

27. When was the car sold? Month in which the car was sold starts with M. Name of the month is of 5 letters.

- A) May
- B) March
- C) Monday
- D) None

28. Ana has 4 chocolates. If she eats one chocolate, how many chocolates are left?

- A) 4
- B) 3
- C) 5
- D) 0

29. Three friends A, B and C participate in a race. C finishes after both A and B. A finishes second. Who won the race?

- A) A
- B) B
- C) C
- D) Cannot be determined

30. Three friends A, B and C participate in a race. C finishes after both A and B. A finishes second. Who came last in the race?

- A) A

# INTERNATIONAL TALENT SEARCH EXAMINATION 2024 - 2025

- B) B
- C) C
- D) Cannot be determined

31. There are 10 dogs and cats in the store. 5 of the pets are dogs. 3 of the cats are white. How many cats are there?

- A) 2
- B) 3
- C) 4
- D) 5

32. Raj needs 20 cherries to make a pie. Which two boxes does he buy?



- A) A and B
- B) B and C
- C) C and D
- D) A and D

33. Joseph can go swimming, to the zoo or to the circus. It is too cold to swim. He is tired of going to the zoo. Where does Joseph go?

- A) Zoo
- B) Circus
- C) Swimming pool
- D) Cannot be determined

34. There are three houses labelled with numbers. Read the given statements and answer the



following questions.

Statements: Binny: My name is Binny. I live between Bobby and Billy. Billy: My house is red. I don't live in house number 3. Bobby: My house is blue. Binny is my neighbour. Whose house colour is green?

- A) Binny
- B) Billy
- C) Bobby
- D) None

35. There are three houses labelled with numbers. Read the given statements and answer the



following questions.

Statements: Binny: My name is Binny. I live between Bobby and Billy. Billy: My house is red. I don't live in house number 3. Bobby: My house is blue. Binny is my neighbour.

Who lives in house No. 3?

- A) Binny
- B) Billy
- C) Bobby

# INTERNATIONAL TALENT SEARCH EXAMINATION 2024 - 2025

D) None

36. There are three houses labelled with numbers. Read the given statements and answer the



following questions.

Statements: Binny: My name is Binny. I live between Bobby and Billy. Billy: My house is red. I don't live in house number 3. Bobby: My house is blue. Binny is my neighbour. Who is the neighbour of Billy?

- A) Binny
- B) Bobby
- C) Both
- D) None

37. Emily, Bea and Ryan each lives in different cities. Emily does not live in Delhi and Mumbai. Bea does not live in Jaipur and Delhi. Where does Emily live?

- A) Delhi
- B) Mumbai
- C) Jaipur
- D) None

38. Emily, Bea and Ryan each lives in different cities. Emily does not live in Delhi and Mumbai. Bea does not live in Jaipur and Delhi. Who does not live in Mumbai?

- A) Emily
- B) Bea
- C) Ryan
- D) Emily and Ryan

39. Raj, Dev and Manav are going to beach, each using a different mode of transportation. Dev drives the car. Manav hates motorcycle. Who drives motorcycle?

- A) Raj
- B) Dev
- C) Manav
- D) No one

40. Raj, Dev and Manav are going to beach, each using a different mode of transportation. Dev drives the car. Manav hates motorcycle. Who drives boat?

- A) Raj
- B) Dev
- C) Manav
- D) No one

41. Mary, Frank, Bob and Juhi all went out for the night party. Mary danced with Bob. Who is the dance partner of Frank?

- A) Mary
- B) Bob
- C) Juhi
- D) None

# INTERNATIONAL TALENT SEARCH EXAMINATION 2024 - 2025


42. Read the given information carefully and answer the following questions:



One hen laid 2 eggs, another laid 4 eggs and yet another laid 5 eggs. Hen at B laid three more eggs than the hen at C. Hen at A laid twice as many eggs as the hen at B. Which hen laid 5 eggs?

- A) Hen at A
- B) Hen at B
- C) Hen at C
- D) None

43. Read the given information carefully and answer the following questions:



One hen laid 2 eggs, another laid 4 eggs and yet another laid 5 eggs. Hen at B laid three more eggs than the hen at C. Hen at A laid twice as many eggs as the hen at B. Which hen laid 2 eggs?

- A) Hen at A
- B) Hen at B
- C) Hen at C
- D) None

44. Kimi has three pet fish.



Fish A is younger than Angel but is older than Jaws. Fish B is not Jaws. One fish is named Bubbles. Which fish is named Bubbles?

- A) Fish A
- B) Fish B
- C) Fish C
- D) None

45. Kimi has three pet fish.



Fish A is younger than Angel but is older than Jaws. Fish B is not Jaws. One fish is named Bubbles. Which is the oldest fish?

- A) Bubbles
- B) Angel
- C) Jaws
- D) None