

**INTERNATIONAL TALENT SEARCH EXAMINATION  
2024 - 2025 PRACTICE PAPER**

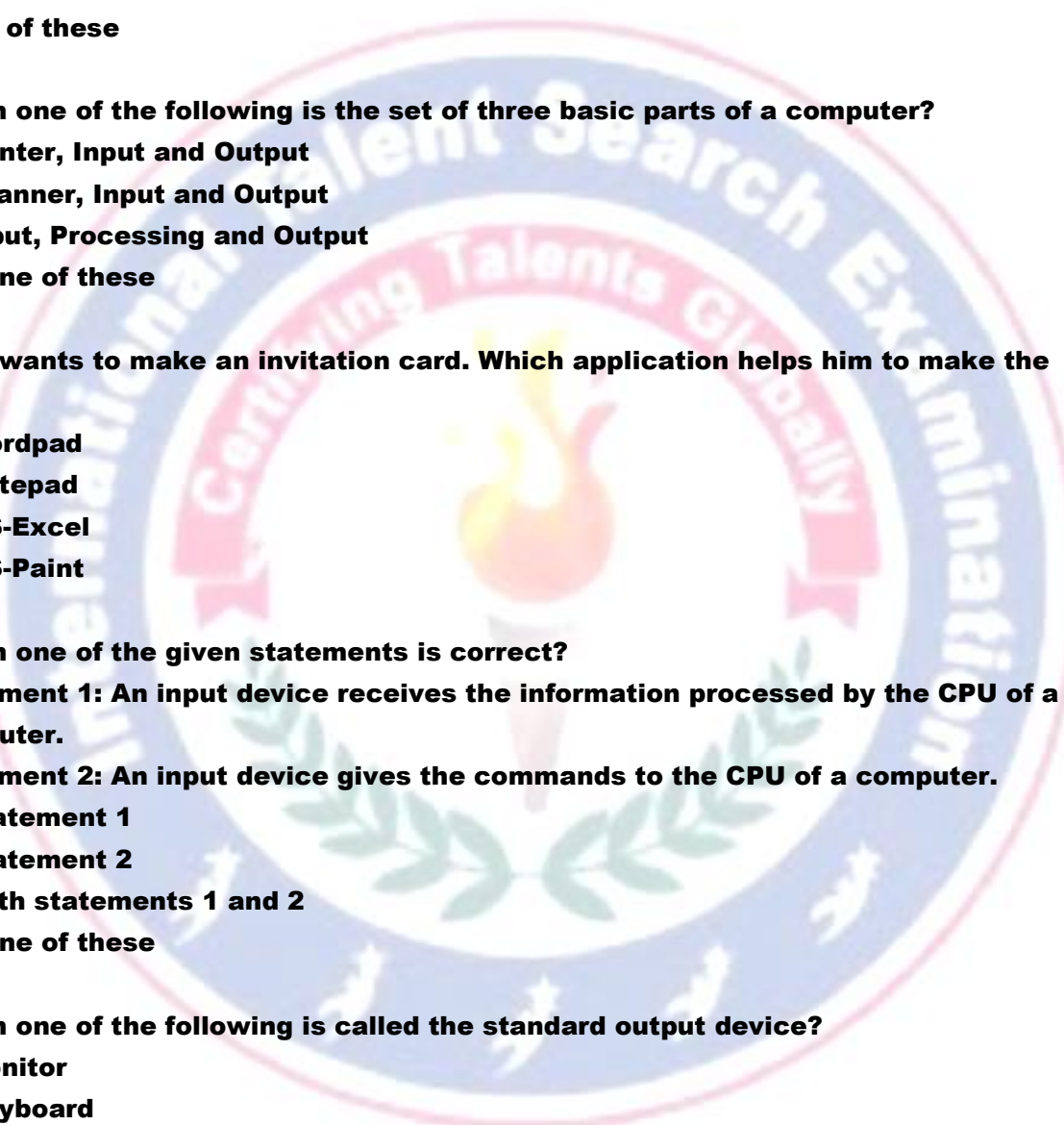
**CLASS – I**

**SUBJECT – COMPUTER**

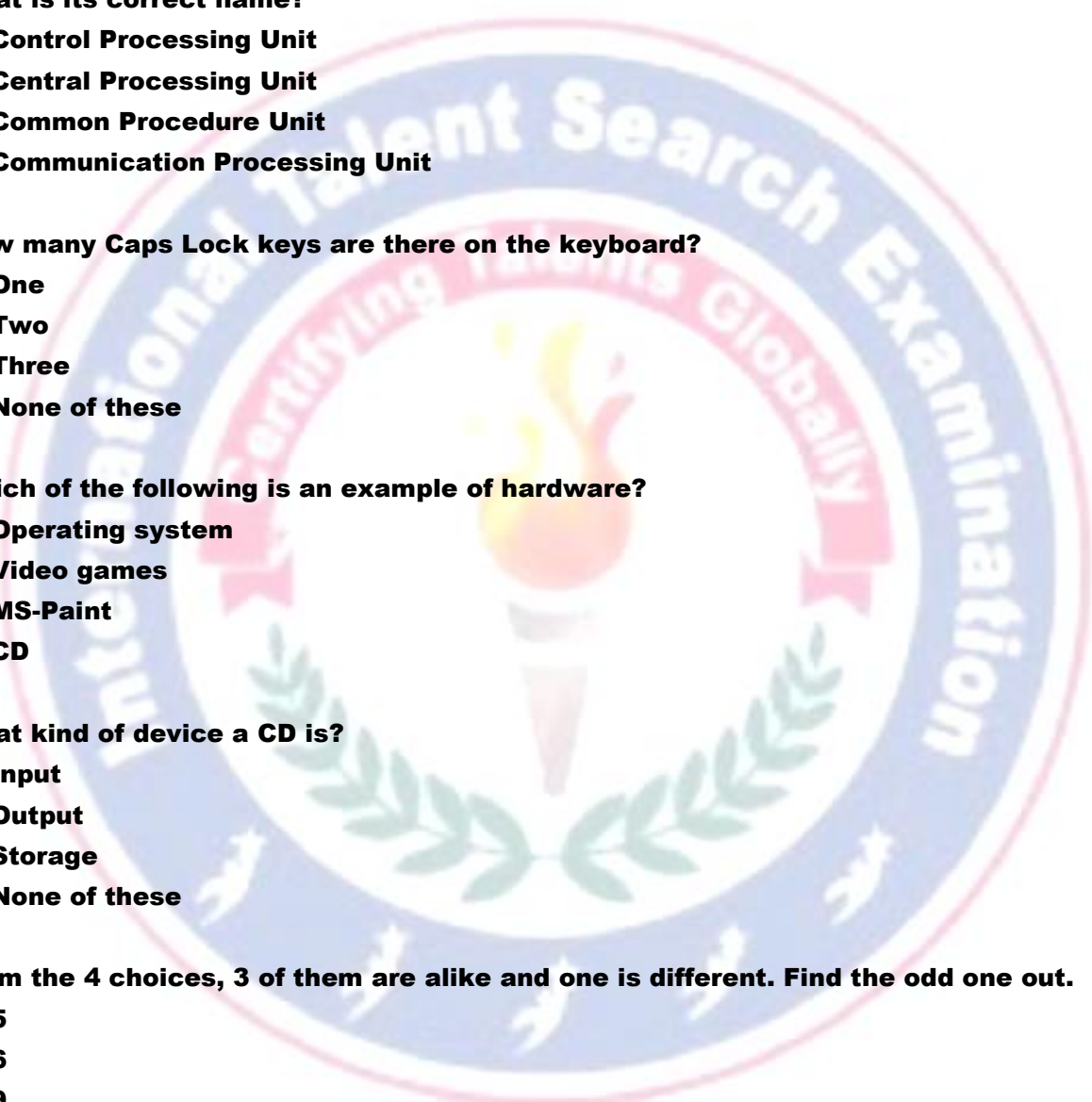
- 1. How a computer can be useful for us?**
    - A) Make time table.**
    - B) Help in making bills.**
    - C) Help in playing games.**
    - D) All of these**
  
  - 2. Which one of the following is the set of three basic parts of a computer?**
    - A) Printer, Input and Output**
    - B) Scanner, Input and Output**
    - C) Input, Processing and Output**
    - D) None of these**
  
  - 3. Jack wants to make an invitation card. Which application helps him to make the card?**
    - A) Wordpad**
    - B) Notepad**
    - C) MS-Excel**
    - D) MS-Paint**
  
  - 4. Which one of the given statements is correct?**

**Statement 1: An input device receives the information processed by the CPU of a computer.**

**Statement 2: An input device gives the commands to the CPU of a computer.**

    - A) Statement 1**
    - B) Statement 2**
    - C) Both statements 1 and 2**
    - D) None of these**
  
  - 5. Which one of the following is called the standard output device?**
    - A) Monitor**
    - B) Keyboard**
    - C) Mouse**
    - D) None of these**
  
  - 6. To shut down the computer, when you click the Start button, the \_\_ box appears.**
    - A) Close it**
    - B) Shut up**
    - C) Shutdown**
    - D) None of these**
- 

**INTERNATIONAL TALENT SEARCH EXAMINATION  
2024 - 2025 PRACTICE PAPER**

- 7. Which one of the followings of a CPU tower is pressed to restart the computer?**  
A) Power Button  
B) Reset  
C) Any [a] or [b]  
D) None of these
- 8. An important part of the computer which is also known as 'Brain of the Computer'.  
What is its correct name?**  
A) Control Processing Unit  
B) Central Processing Unit  
C) Common Procedure Unit  
D) Communication Processing Unit
- 9. How many Caps Lock keys are there on the keyboard?**  
A) One  
B) Two  
C) Three  
D) None of these
- 10. Which of the following is an example of hardware?**  
A) Operating system  
B) Video games  
C) MS-Paint  
D) CD
- 11. What kind of device a CD is?**  
A) Input  
B) Output  
C) Storage  
D) None of these
- 12. From the 4 choices, 3 of them are alike and one is different. Find the odd one out.**  
A) 5  
B) 6  
C) 9  
D) 12
- 13. Which one of the following number is 20 less than 83?**  
A) 63  
B) 53  
C) 43  
D) None of these
- 

**INTERNATIONAL TALENT SEARCH EXAMINATION  
2024 - 2025 PRACTICE PAPER**

- 14. The function keys on the keyboard start from F1 and continue till \_\_\_\_.**
- A) F9
  - B) F10
  - C) F11
  - D) F12
  - E) None of these
- 15. The keyboard of Steve is showing Num Lock ON, it means he can type numbers on keyboard. How will he switch it OFF?**
- A) By pressing Shift Key
  - B) By pressing Tab Key
  - C) By pressing Num Lock Key
  - D) By pressing Caps Lock Key
  - E) None of these
- 16. The correct sequence to start a computer: (When Electric Switch is already ON)**
- A) CPUon→UPSon→Monitoron
  - B) UPSon→CPUon→Monitoron
  - C) Monitoron→CPUon→UPSon
  - D) All of these
  - E) None of these
- 17. Who does not commit mistake?**
- A) Man
  - B) Computer
  - C) Animals
  - D) Birds
  - E) None of these
- 18. Which one of the following is one of the most important features of computer?**
- A) Speed
  - B) Emotion
  - C) Color
  - D) All of these
  - E) None of these
- 19. How a computer can be useful for us?**
- A) It helps in drawing picture.
  - B) It helps in making results
  - C) Used to play games.
  - D) All of these
  - E) None of these

**INTERNATIONAL TALENT SEARCH EXAMINATION  
2024 - 2025 PRACTICE PAPER**

**20. The size of the keys on the keyboard vary. What kind of key the spacebar is?**

- A) It is the shortest key**
- B) It is the longest key**
- C) It is average size key**
- D) All of these**
- E) None of these**

**21. Which one of the following is not an output device?**

- A) Joystick**
- B) Printer**
- C) Monitor**
- D) Keyboard**
- E) None of these**

**22. Graphical pictures that represent an object like file, folder etc. are:**

- A) Taskbar**
- B) Windows**
- C) Icons**
- D) Desktop**
- E) None of these**

**23. Computer is an electronic machine. It uses \_\_\_ energy to work.**

- A) electrical**
- B) manual**
- C) solar**
- D) All of these**
- E) None of these**

**24. What kind of device is a printer?**

- A) Input**
- B) Output**
- C) Both Input and Output**
- D) Storage**
- E) None of these**

**25. All the operations of the computer are carried out by which device?**

- A) CPU**
- B) Keyboard**
- C) Monitor**
- D) All of these**
- E) None of these**

**26. What is the use of the application MS-Paint in Window 7?**





**INTERNATIONAL TALENT SEARCH EXAMINATION  
2024 - 2025 PRACTICE PAPER**

- A) To write the letters**
- B) To draw pictures**
- C) For mathematical calculations**
- D) All of these**
- E) None of these**

**27. What is the use of computer in hospitals?**

- A) To find the disease**
- B) To keep the records of patient**
- C) To inspect the internal parts of body**
- D) All of these**
- E) None of these**

**28. If  $ABC=123$ , then  $BCD=?$**

- A) 456**
- B) 234**
- C) 345**
- D) 145**
- E) None of these**

**29. Four words are given, out of which three are same in a certain way while the rest one is different. Find out the different one.**


- A) Bowl**
- B) Spoon**
- C) Cup**
- D) Bouquet**
- E) None of these**

**30. Choose the missing number from the options given below. 23, 27, 31, [ ], 39, 43**

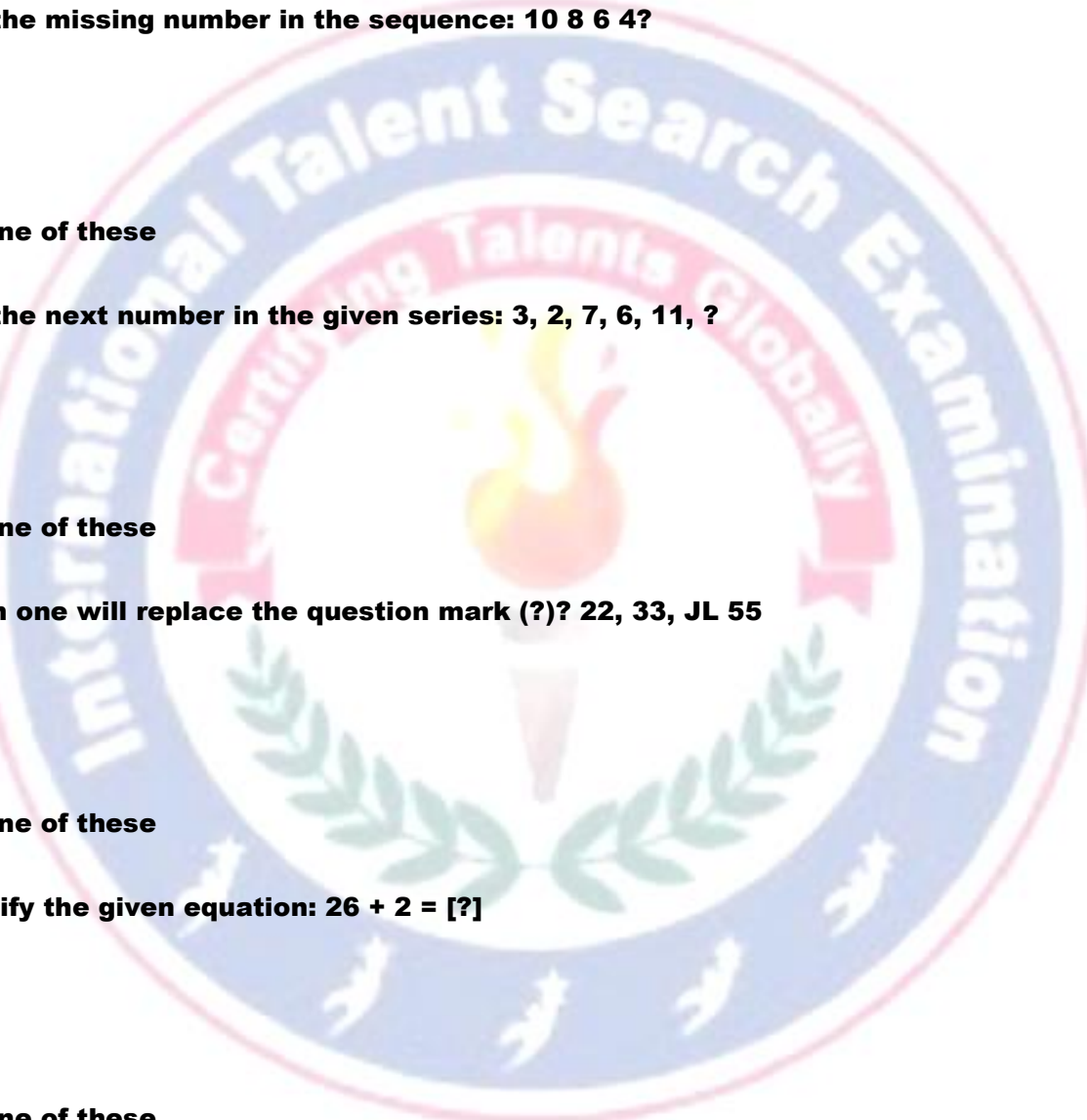
- A) 32**
- B) 35**
- C) 33**
- D) 53**
- E) None of these**

**31. Simplify:  $12+14=?$**

- A) 28**
- B) 26**
- C) 27**
- D) 30**
- E) None of these**



INTERNATIONAL TALENT SEARCH EXAMINATION  
2024 - 2025 PRACTICE PAPER

32. In a clock, for a minute hand, how many minutes it will take to move from the position of 5 to 8.
- A) 3 minutes
  - B) 8 minutes
  - C) 15 minutes
  - D) 5 minutes
  - E) None of these
33. Find the missing number in the sequence: 10 8 6 4?
- A) 2
  - B) 7
  - C) -2
  - D) 0
  - E) None of these
34. Find the next number in the given series: 3, 2, 7, 6, 11, ?
- A) 8
  - B) 10
  - C) 4
  - D) 2
  - E) None of these
35. Which one will replace the question mark (?)? 22, 33, JL 55
- A) 44
  - B) 43
  - C) 34
  - D) 42
  - E) None of these
36. Simplify the given equation:  $26 + 2 = [?]$
- A) 26
  - B) 28
  - C) 30
  - D) 32
  - E) None of these
37. In a certain code language 'A' is coded as '5', 'B' is coded as '6', 'C' is coded as '7', and so on, then find the code of 'DCE'.
- A) 879
  - B) 789
  - C) 987
  - D) 897
  - E) None of these
- 

**INTERNATIONAL TALENT SEARCH EXAMINATION  
2024 - 2025 PRACTICE PAPER**

**38. What is the 9th term of the series below from left? 1 2 4 6 8 9 7 8 9 6 7 8 9**

- A) 7
- B) 8
- C) 9
- D) 6
- E) None of these

**39. Ramesh had 8 balls and he gave 3 to his brother. How many balls does Ramesh have now?**

- A) 4
- B) 5
- C) 3
- D) 8
- E) None of these

**40. Which one of the following symbol is used for addition?**

- A) ,
- B) +
- C) \*
- D) -
- E) None of these

**41. An optical input device that interprets pencil marks on paper media is:**

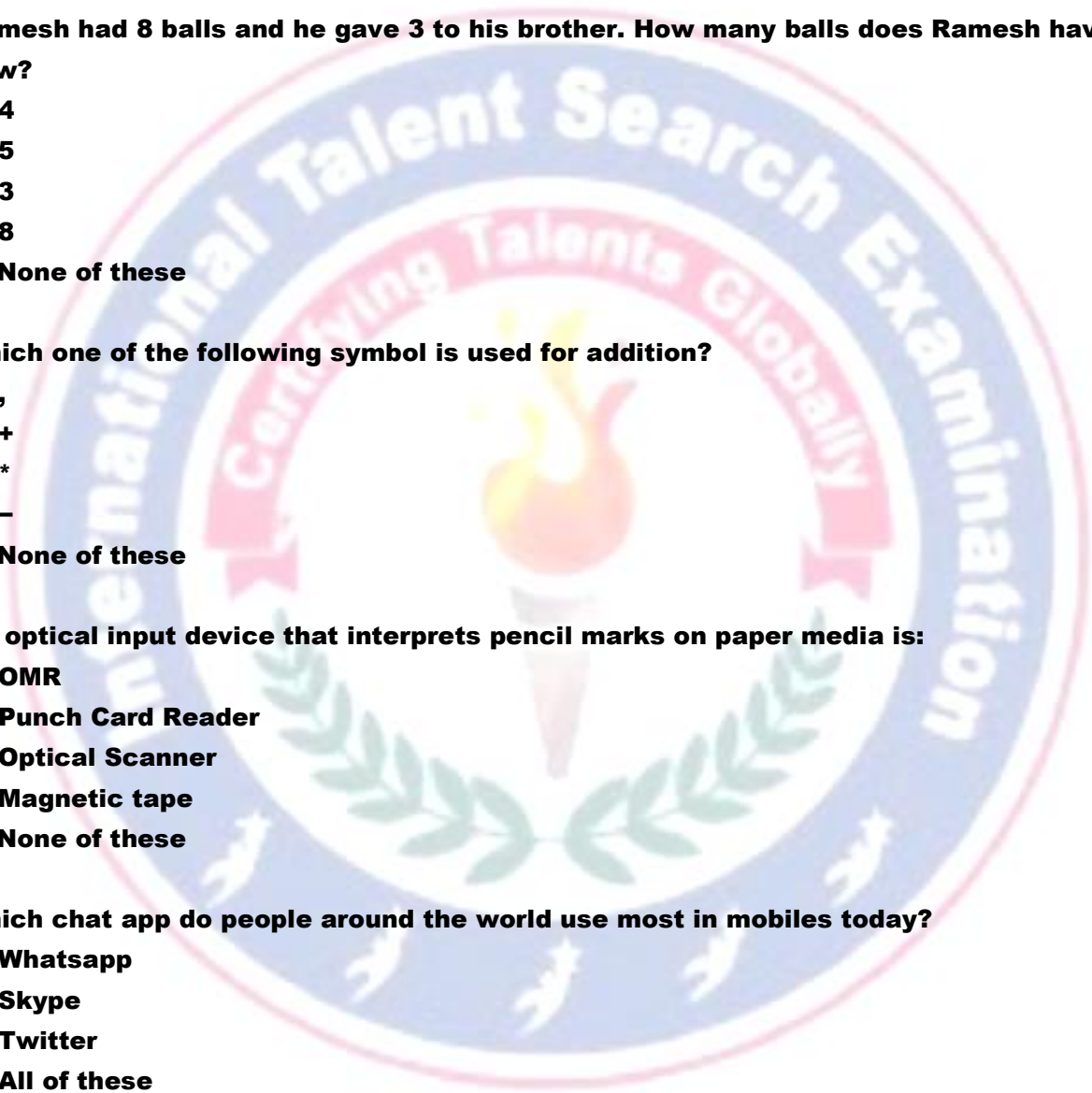
- A) OMR
- B) Punch Card Reader
- C) Optical Scanner
- D) Magnetic tape
- E) None of these

**42. Which chat app do people around the world use most in mobiles today?**

- A) Whatsapp
- B) Skype
- C) Twitter
- D) All of these
- E) None of these

**43. Which operation is not performed by computer?**

- A) Input
- B) Processing
- C) Controlling
- D) Understanding
- E) None of these



INTERNATIONAL TALENT SEARCH EXAMINATION  
2024 - 2025 PRACTICE PAPER

44. Output device make it possible to \_\_\_\_.

- A) View and print a data
- B) Scan a data
- C) Input a data
- D) Send a data
- E) None of these

45. If Tomorrow will be Wednesday, then Yesterday was \_\_\_\_.

- A) Monday
- B) Tuesday
- C) Thursday
- D) Friday
- E) None of these

